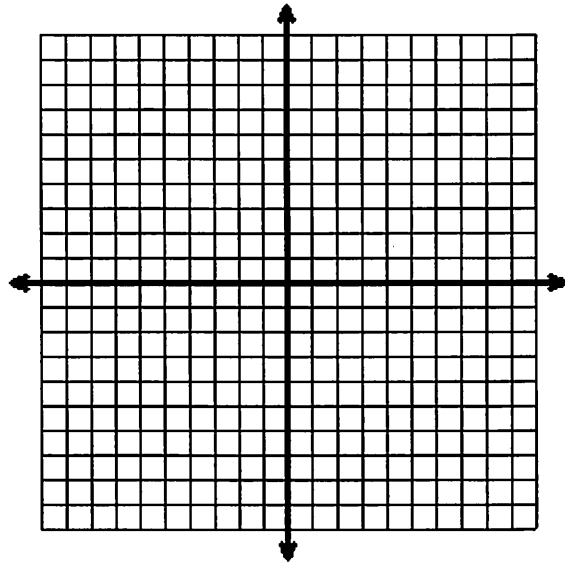


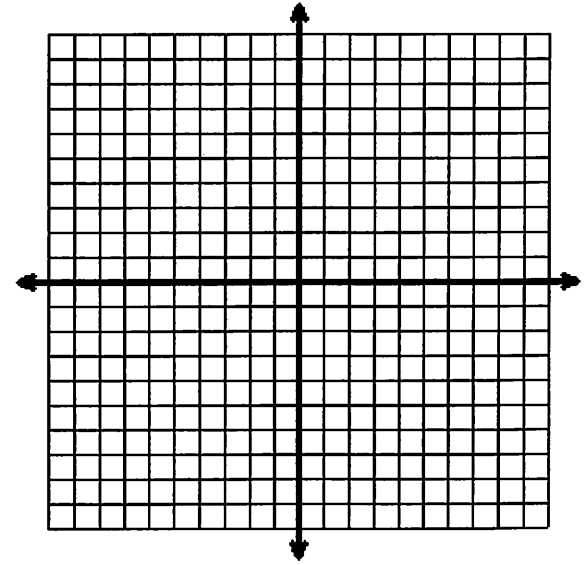
Graphing Linear Functions with the Graphing Calculator

Name _____

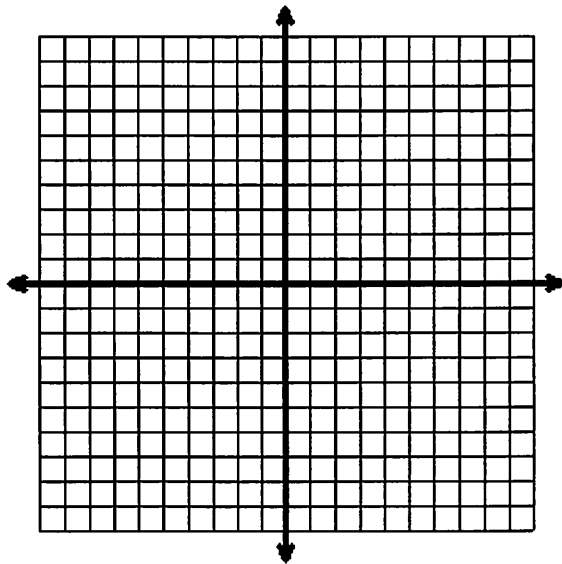
$$y = 2x - 5$$



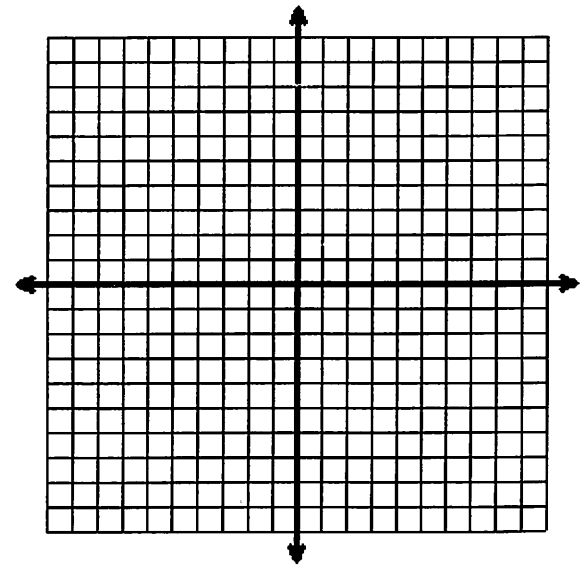
$$y = 2x + 1$$



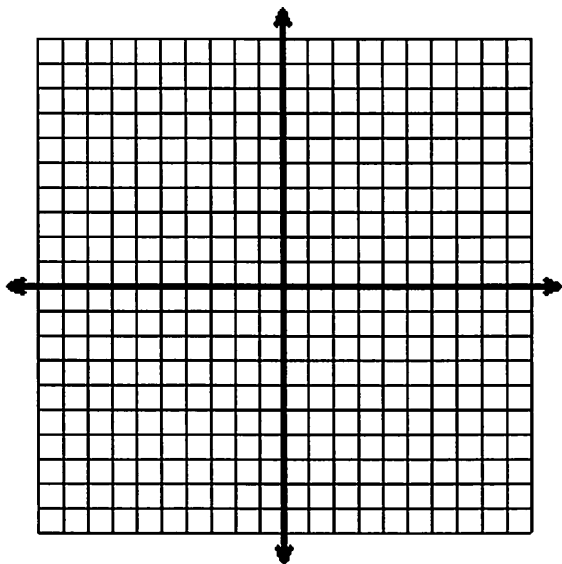
$$y = -5x + 4$$



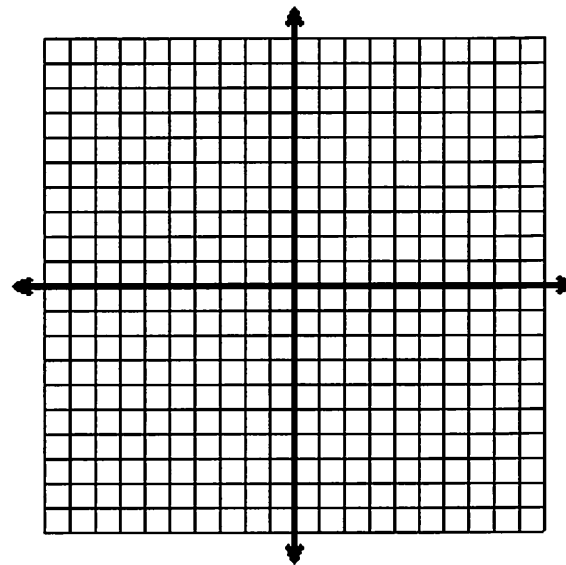
$$y = -3x + 4$$



$$y = \frac{1}{3}x - 2$$



$$y = \frac{3}{4}x + 3$$



Linear Equations are generally in the form of

$$y = mx + b$$

What do these values tell you about the graph?

m is 2

m is $\frac{1}{3}$

m is $-\frac{1}{3}$

b is +5

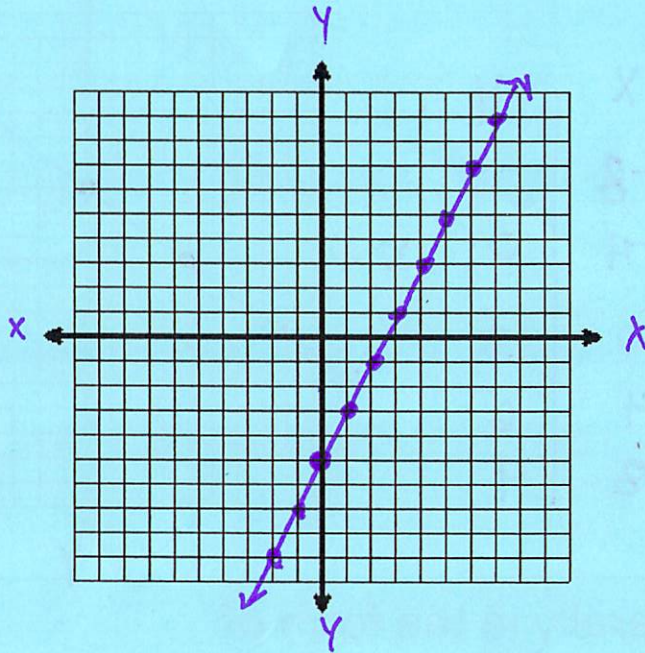
b is -6

Graphing Linear Functions with the Graphing Calculator

Name _____

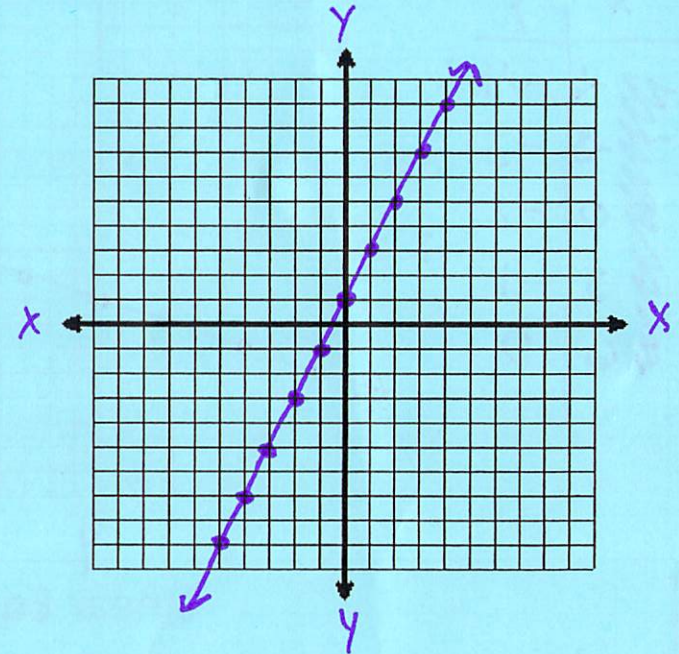
$y = 2x - 5$

x	y
-2	-9
-1	-7
0	-5
1	-3
2	-1
3	1



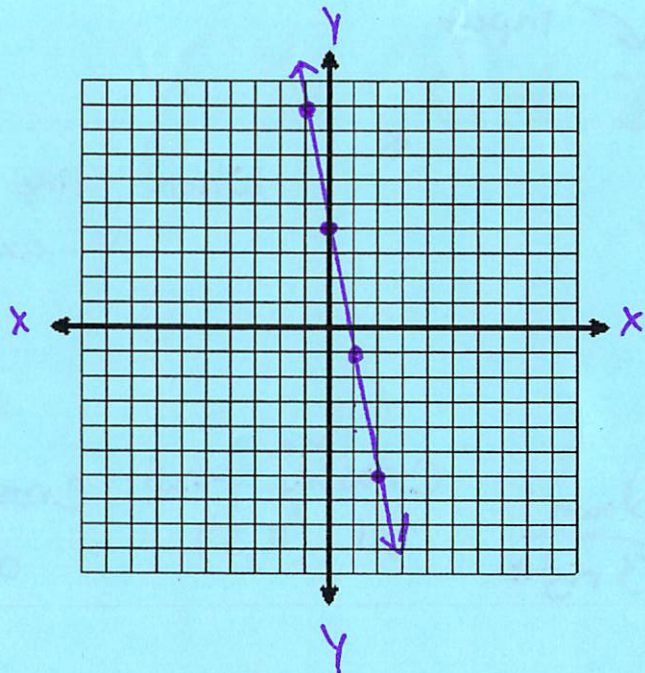
$y = 2x + 1$

x	y
-2	-3
-1	-1
0	1
1	3
2	5
3	7



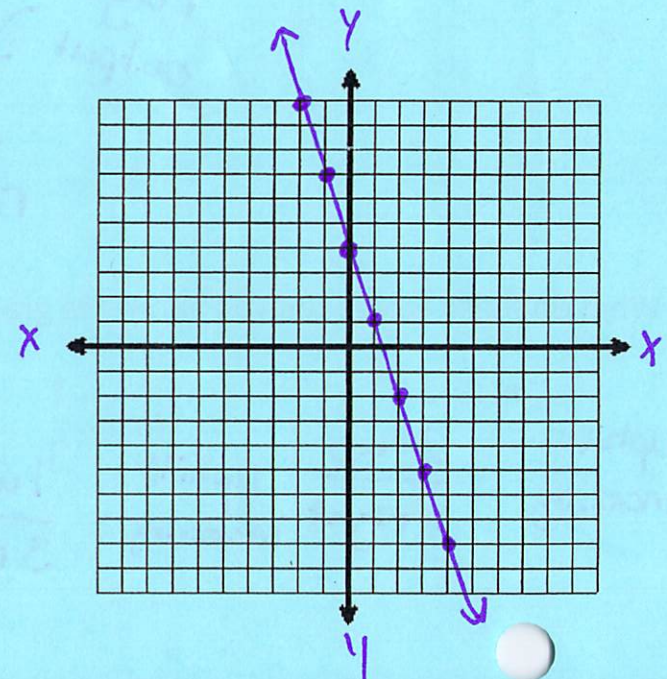
$y = -5x + 4$

x	y
-1	9
0	4
1	-1
2	-6



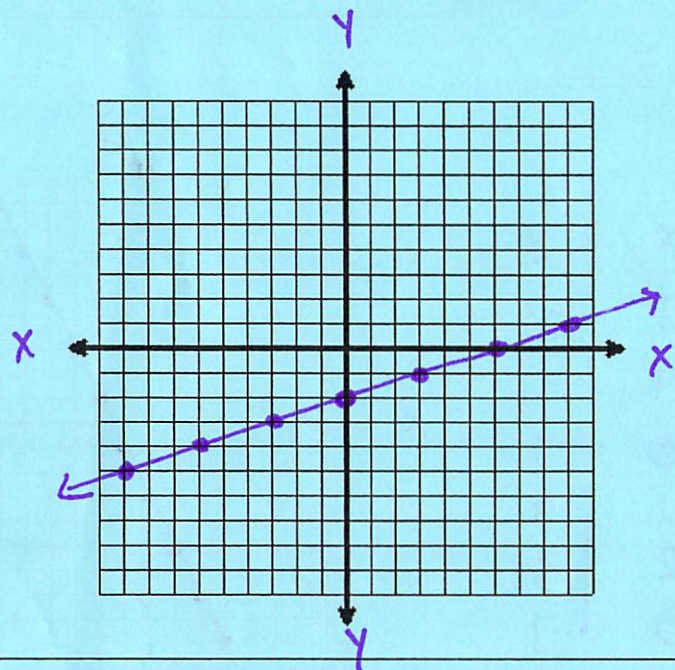
$y = -3x + 4$

x	y
-1	7
0	4
1	1
2	-2
3	-5



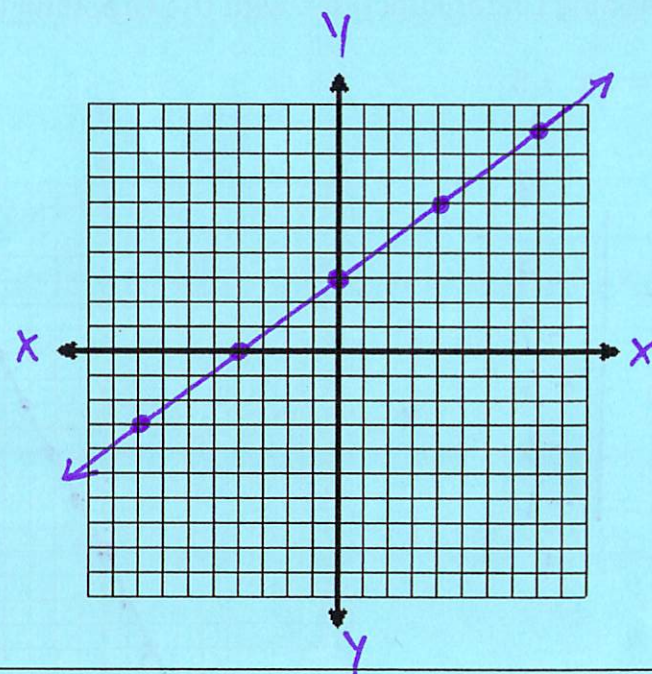
$$y = \frac{1}{3}x - 2$$

x	y
-6	-4
-3	-3
0	-2
3	-1
6	0



$$y = \frac{3}{4}x + 3$$

x	y
-8	-3
-4	0
0	3
4	6
8	9



Linear Equations are generally in the form of

$$y = mx + b$$

range output \rightarrow y
 domain input \leftarrow x
 rate of change Slope \uparrow m
 Where line crosses y -axis \leftarrow b

What do these values tell you about the graph?

m is 2
 uphill increasing
 $\frac{2 \text{ up}}{1 \text{ right}}$

m is $\frac{1}{3}$
 uphill increasing
 $\frac{1 \text{ up}}{3 \text{ right}}$

m is $-\frac{1}{3}$
 downhill decreasing
 $\frac{\text{down } 1}{3 \text{ right}}$

b is +5
 line crosses y -axis at (0, 5)

b is -6
 line crosses y -axis at (0, -6)