

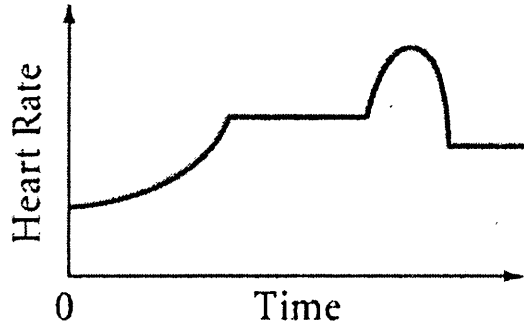
Relating Graphs to Events

Name _____

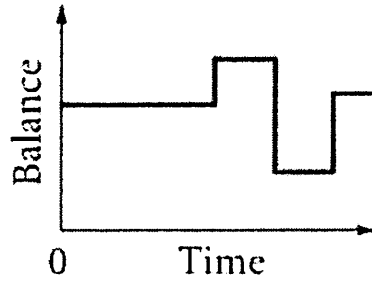
PRACTICE: p254 1 – 10, p255 14 and 16 (Use attached for questions 1-4)

Chapter 5 p254: Label and Describe what is happening at each section of the graph

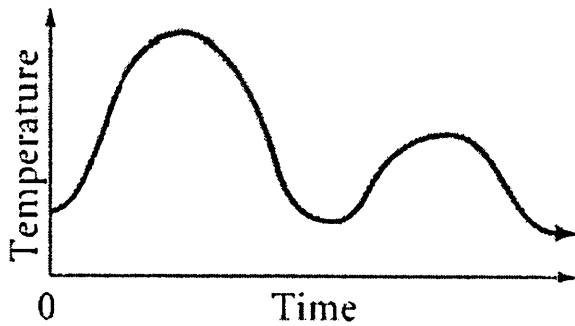
1. Exercising



2. Checking Account



3. Weekend Temperatures



4. Hair Length

