

Measure of Center and Variability

Mr. Falci and Mr. Burke asked the students in their Algebra classes how many minutes a night they spent on math homework. The data is show in the frequency tables.

Mr. Falci's Class

Minutes	Frequency
5	1
15	2
20	8
90	2

Mr. Burke's Class

Minutes	Frequency
5	3
15	6
20	4
25	2

List the data from the frequency table in order from *least to greatest* for **Mr. Falci's class**.

List the data from the frequency table in order from *least to greatest* for **Mr. Burke's class**.

Mr. Falci's Class

Mean - _____

Median - _____

Mode - _____

Range - _____

Mr. Burke's Class

Mean - _____

Median - _____

Mode - _____

Range - _____

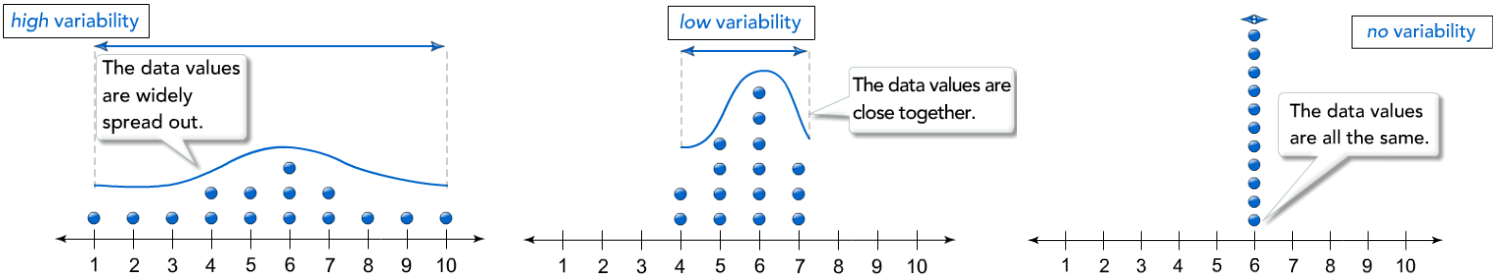
A data set's **Measure of Center** refers to a single value that best describes the data set. **Outliers** affect a data sets measure of center. If a data set HAS OUTLIERS, the MEDIAN is the best choice to represent the measure of center because it is NOT affected by outliers. If a data set DOES NOT HAVE OUTLIERS, the MEAN or MEDIAN will be relatively close so either is acceptable to represent the measure of center.

*Which measure of center best represents Mr. Falci's data _____

*Which measure of center best represents Mr. Burke's data _____

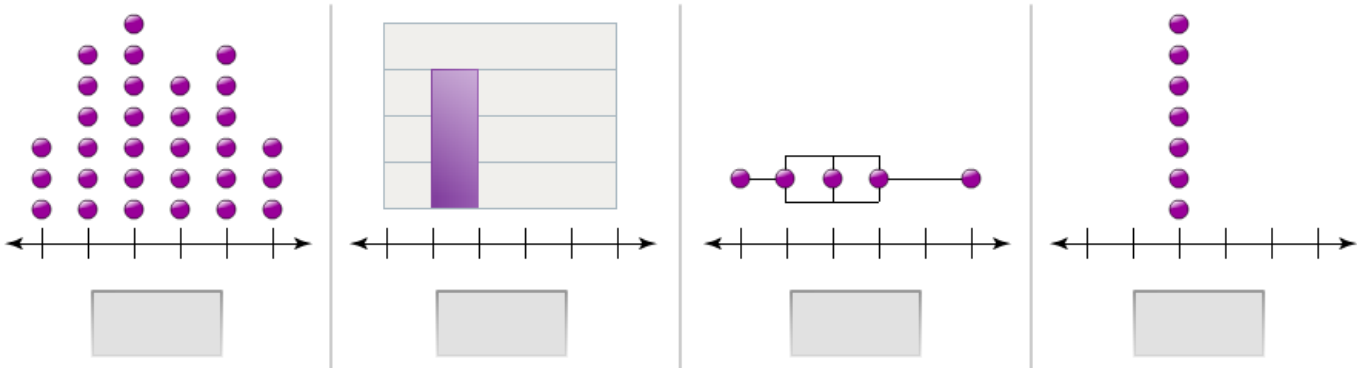
Which teacher's class do you say spends more time on their homework? Explain.

Variability describes how much the data values in a data set differ, or vary, from each other.



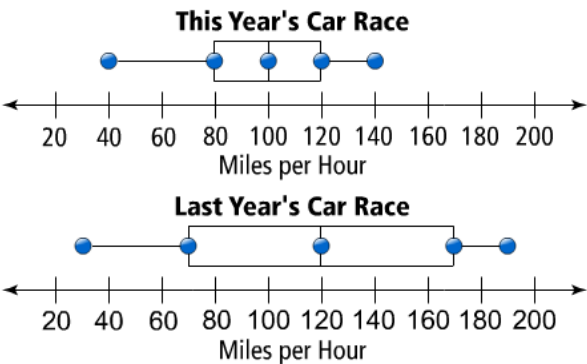
Example
Label each data display to describe its level of variability.

High Low None



Got It?

Which race was more competitive, this year's or last year's?



Got It?

A coffee shop wants to serve coffee at the same temperature every time for the best taste. On average, both shop workers hit the shop goal. However, the shop manager thinks one worker does a better job than the other.

Tell what temperature the shop wants the coffee to be. Then explain who the manager thinks did a better job.

Coffee Temperature by Cup (°F)							
Worker A	155	160	150	145	170	175	165
Worker B	155	160	163	157	162	158	165

Measure of Center and Variability

Mr. Falci and Mr. Burke asked the students in their Algebra classes how many minutes a night they spent on math homework. The data is shown in the frequency tables.

Mr. Falci's Class

Minutes	Frequency
5	1
15	2
20	8
90	2

Mr. Burke's Class

Minutes	Frequency
5	3
15	6
20	4
25	2

List the data from the frequency table in order from *least to greatest* for **Mr. Falci's class**.

5, 15, 15, 20, 20, 20, 20, 20, 20, 20, 20, 90, 90

List the data from the frequency table in order from *least to greatest* for **Mr. Burke's class**.

5, 5, 5, 15, 15, 15, 15, 15, 15, 20, 20, 20, 20, 25, 25

Mr. Falci's Class

Mean - $375 \div 13 = 28.8$

Median - 20

Mode - 20

Range - $90 - 5 = 85$

Mr. Burke's Class

Mean - $235 \div 15 = 15.7$

Median - 15

Mode - 15

Range - $25 - 5 = 20$

A data set's **Measure of Center** refers to a single value that best describes the data set. **Outliers** affect a data set's measure of center. If a data set HAS OUTLIERS, the MEDIAN is the best choice to represent the measure of center because it is NOT affected by outliers. If a data set DOES NOT HAVE OUTLIERS, the MEAN or MEDIAN will be relatively close so either is acceptable to represent the measure of center.

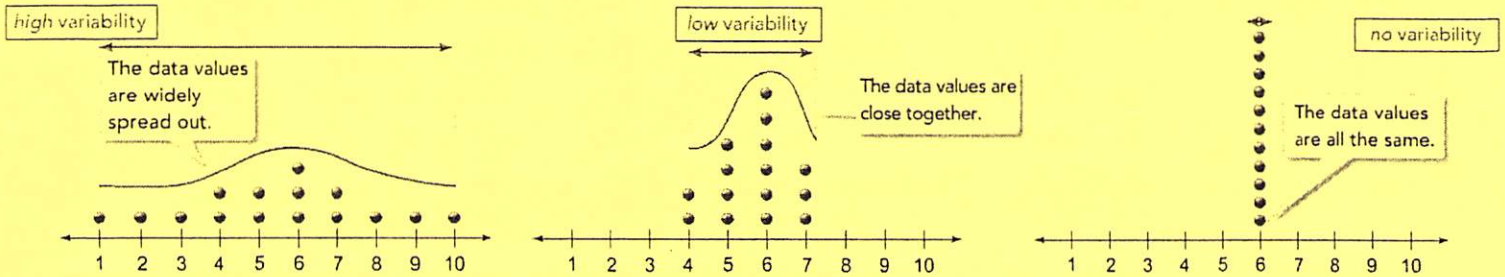
*Which measure of center best represents Mr. Falci's data median 20
because the outliers affect the mean

*Which measure of center best represents Mr. Burke's data mean or median 15
because there are no outliers

Which teacher's class do you say spends more time on their homework? Explain.

Mr. Falci's because the measure of center is higher

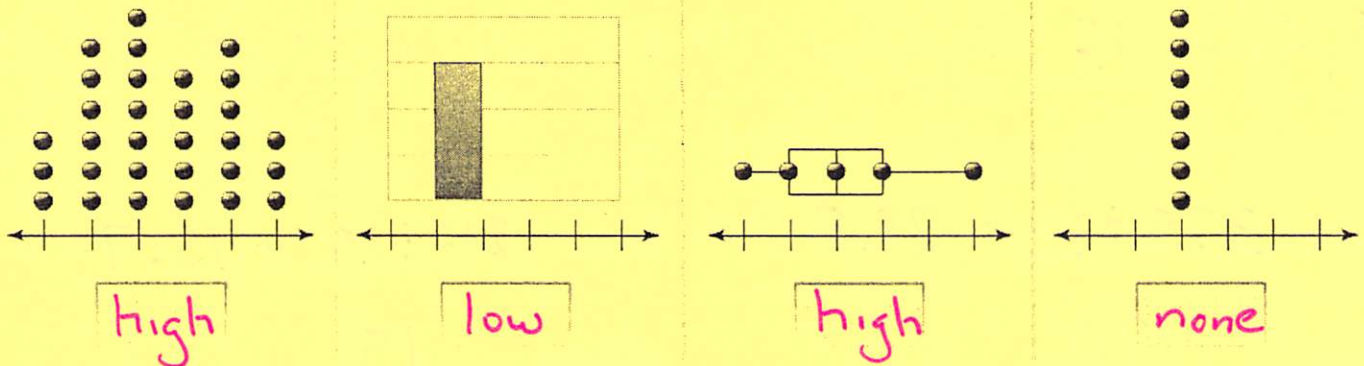
Variability describes how much the data values in a data set differ, or vary, from each other.



Example

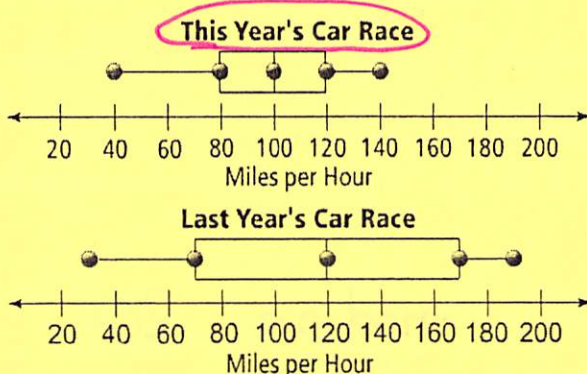
Label each data display to describe its level of variability.

High Low None



Got It?

Which race was more competitive, this year's or last year's?



The data isn't as spread out as last year's race

Got It?

A coffee shop wants to serve coffee at the same temperature every time for the best taste. On average, both shop workers hit the shop goal. However, the shop manager thinks one worker does a better job than the other.

Tell what temperature the shop wants the coffee to be. Then explain who the manager thinks did a better job.

mean for both A and B = 160

Coffee Temperature by Cup (°F)

Worker A	155	160	150	145	170	175	165
Worker B	155	160	163	157	162	158	165

Worker B had less variability and was closer to the goal more often