

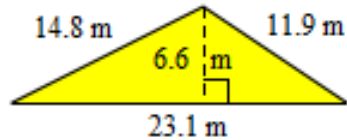
Station 1: Is/Of Percent Problems

Station 2: Percent Word Problems

Station 3: Area of Single Shapes

Example

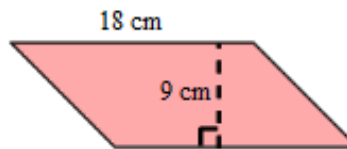
What is the area of the triangle?



Formula and List of Values:	Substitution and Solve:	Final Labeled Answer:

Got It?

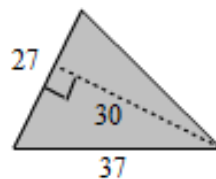
What is the area of the parallelogram?



Formula and List of Values:	Substitution and Solve:	Final Labeled Answer:

Example

What is the area of the triangle?



Formula and List of Values:	Substitution and Solve:	Final Labeled Answer:

Example

What is the area of the square?

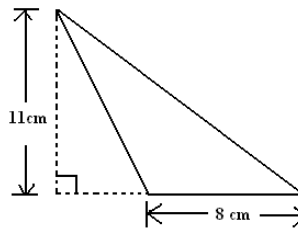


22 ft

Formula and List of Values:	Substitution and Solve:	Final Labeled Answer:
-----------------------------	-------------------------	-----------------------

Example

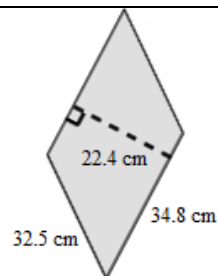
What is the area of the triangle?



Formula and List of Values:	Substitution and Solve:	Final Labeled Answer:
-----------------------------	-------------------------	-----------------------

Got It?

What is the area of the parallelogram?

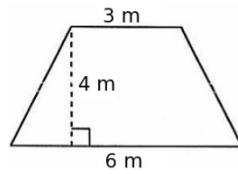


Formula and List of Values:	Substitution and Solve:	Final Labeled Answer:
-----------------------------	-------------------------	-----------------------

Station 4: Area of Composite Shapes

Example

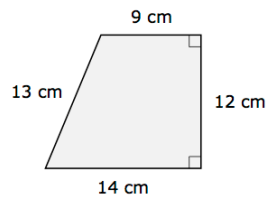
What is the area of the trapezoid?



Formula and List of Values:	Substitution and Solve:	Final Labeled Answer:

Example

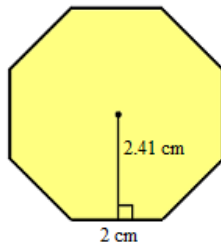
What is the area of the trapezoid?



Formula and List of Values:	Substitution and Solve:	Final Labeled Answer:

Example

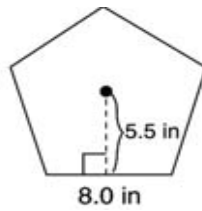
What is the area of the octagon?



Formula and List of Values:	Substitution and Solve:	Final Labeled Answer:

Example

What is the area of the pentagon?



Formula and List of Values:	Substitution and Solve:	Final Labeled Answer: